



SUMAS

con frutas



Cuenta las frutas, realiza la suma y escribe el resultado.

$$\text{3 strawberries} + \text{2 strawberries} = \square$$

$$\text{4 pears} + \text{3 pears} = \square$$

$$\text{2 bunches of grapes} + \text{3 bunches of grapes} = \square$$

$$\text{5 bananas} + \text{2 bananas} = \square$$

$$\text{3 oranges} + \text{4 oranges} = \square$$

$$\text{2 watermelon slices} + \text{3 watermelon slices} = \square$$

$$\text{5 pairs of cherries} + \text{3 pairs of cherries} = \square$$


$$\text{4 apples} + \text{3 apples} = \square$$





SUMAS

con verduras



Cuenta las verduras, realiza la suma y escribe el resultado.

1



+



=

2



+



=

3




+



=

4



+




=

5



+



=

6



+



=

7



+

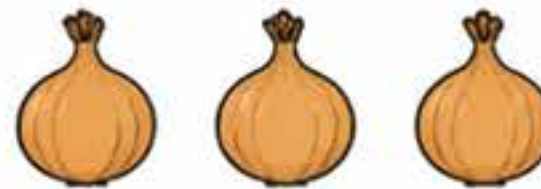


=

8



+



=

9



+




=

10



+



=





SUMAS

con animales de granja




Cuenta los animales, realiza la suma y escribe el resultado.

1  +  =

2  +  =



3  +  =

4  +  =


5  +  =

6  +  =

7  +  =


8  +  =






SUMAS



de dinosaurios





Cuenta los dinosaurios, realiza la suma y escribe el resultado.

1  +  =

2  +  =

3  +  =

4  +  =

5  +  =

6  +  =

7  +  =

8  +  =





SUMAS


con dibujos



Cuenta los dibujos, realiza la suma y escribe el resultado.



+




=



+



=



+



=



+



=



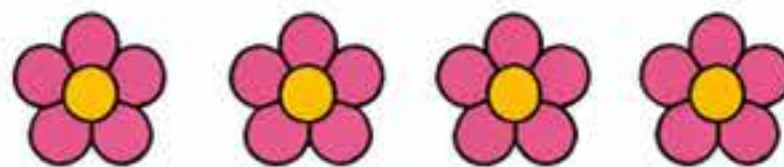
+



=



+



=



+



=



+



=

