

Cuadernillo de  
**SUMAS Y RESTAS**




Mundo ABC



segundo grado de primaria

# Sumas



$$\begin{array}{r} 36 \\ + 45 \\ \hline \end{array}$$

$$\begin{array}{r} 19 \\ + 73 \\ \hline \end{array}$$

$$\begin{array}{r} 97 \\ + 15 \\ \hline \end{array}$$

$$\begin{array}{r} 18 \\ + 64 \\ \hline \end{array}$$

$$\begin{array}{r} 77 \\ + 63 \\ \hline \end{array}$$

$$\begin{array}{r} 98 \\ + 99 \\ \hline \end{array}$$

$$\begin{array}{r} 33 \\ + 18 \\ \hline \end{array}$$

$$\begin{array}{r} 57 \\ + 65 \\ \hline \end{array}$$

$$\begin{array}{r} 48 \\ + 48 \\ \hline \end{array}$$


$$\begin{array}{r} 16 \\ + 19 \\ \hline \end{array}$$

$$\begin{array}{r} 56 \\ + 45 \\ \hline \end{array}$$

$$\begin{array}{r} 94 \\ + 66 \\ \hline \end{array}$$



# Sumas



$$\begin{array}{r} 18 \\ + 26 \\ \hline \end{array}$$

$$\begin{array}{r} 14 \\ + 54 \\ \hline \end{array}$$

$$\begin{array}{r} 46 \\ + 76 \\ \hline \end{array}$$

$$\begin{array}{r} 63 \\ + 12 \\ \hline \end{array}$$

$$\begin{array}{r} 74 \\ + 63 \\ \hline \end{array}$$

$$\begin{array}{r} 59 \\ + 36 \\ \hline \end{array}$$

$$\begin{array}{r} 45 \\ + 25 \\ \hline \end{array}$$

$$\begin{array}{r} 88 \\ + 99 \\ \hline \end{array}$$

$$\begin{array}{r} 58 \\ + 54 \\ \hline \end{array}$$



$$\begin{array}{r} 36 \\ + 63 \\ \hline \end{array}$$

$$\begin{array}{r} 47 \\ + 56 \\ \hline \end{array}$$

$$\begin{array}{r} 18 \\ + 12 \\ \hline \end{array}$$



# Restas



$$\begin{array}{r} 100 \\ - 048 \\ \hline \end{array}$$

$$\begin{array}{r} 28 \\ - 14 \\ \hline \end{array}$$

$$\begin{array}{r} 54 \\ - 48 \\ \hline \end{array}$$

$$\begin{array}{r} 100 \\ - 027 \\ \hline \end{array}$$

$$\begin{array}{r} 94 \\ - 48 \\ \hline \end{array}$$

$$\begin{array}{r} 11 \\ - 05 \\ \hline \end{array}$$

$$\begin{array}{r} 100 \\ - 076 \\ \hline \end{array}$$

$$\begin{array}{r} 66 \\ - 13 \\ \hline \end{array}$$

$$\begin{array}{r} 81 \\ - 57 \\ \hline \end{array}$$


$$\begin{array}{r} 100 \\ - 062 \\ \hline \end{array}$$

$$\begin{array}{r} 49 \\ - 24 \\ \hline \end{array}$$

$$\begin{array}{r} 46 \\ - 19 \\ \hline \end{array}$$



# Operaciones



$$\begin{array}{r} 100 \\ - 019 \\ \hline \end{array}$$

$$\begin{array}{r} 28 \\ + 14 \\ \hline \end{array}$$

$$\begin{array}{r} 58 \\ - 12 \\ \hline \end{array}$$

$$\begin{array}{r} 58 \\ + 36 \\ \hline \end{array}$$

$$\begin{array}{r} 100 \\ - 022 \\ \hline \end{array}$$

$$\begin{array}{r} 06 \\ + 98 \\ \hline \end{array}$$

$$\begin{array}{r} 72 \\ - 59 \\ \hline \end{array}$$

$$\begin{array}{r} 87 \\ + 88 \\ \hline \end{array}$$

$$\begin{array}{r} 25 \\ - 14 \\ \hline \end{array}$$






$$\begin{array}{r} 100 \\ - 048 \\ \hline \end{array}$$

$$\begin{array}{r} 95 \\ + 94 \\ \hline \end{array}$$


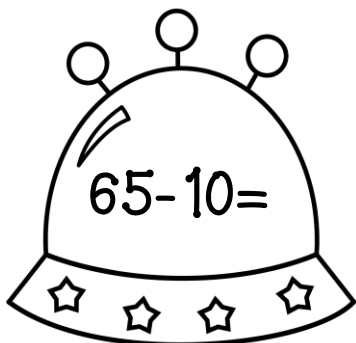
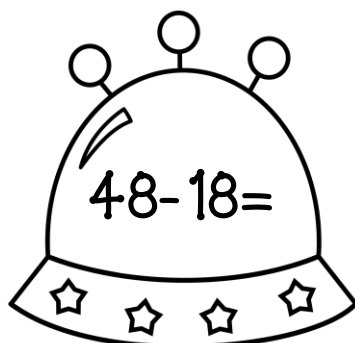
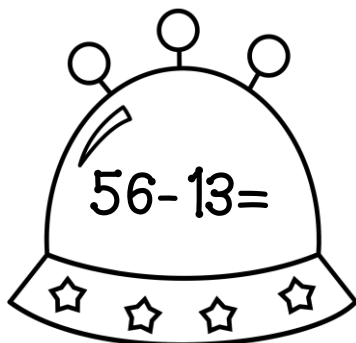

$$\begin{array}{r} 28 \\ + 17 \\ \hline \end{array}$$



# sumas



# Restas




Mundo ABC


# sumas

Mundo ABC

Une los pastelitos con su resultado correcto.



$50+24=$



$15+3=$



$26+10=$



$18+18=$



$9+9=$







$69+5=$




# Restas


Une los pastelitos con su resultado correcto.




# Sumas



$$4 + \square = 12$$




$$8 + \square = 20$$




$$10 + \square = 25$$




$$2 + \square = 16$$




$$7 + \square = 30$$



$$5 + \square = 22$$



$$9 + \square = 18$$



$$1 + \square = 11$$



$$3 + \square = 10$$

# Sumas

Colorea el resultado correcto.

$15+12=$




$14+7=$




$28+5=$




$19+3=$



$17+9=$




$36+8=$



# Sumas

Colorea el resultado correcto.

$82+8=$





$54+10=$



$63+7=$




$12+8=$



$40+12=$



$26+5=$




# Restas

Colorea el resultado correcto.



$14 - 9 =$



$36 - 8 =$





$87 - 5 =$




$64 - 5 =$



$98 - 9 =$



$74 - 12 =$



# Operaciones

Colorea el resultado correcto.


$100+36=$   136  1036


$120+23=$   143  133

$58-9=$   39  49

$54+12=$   66  46








$39-15=$   34  24

$98-5=$   93  92



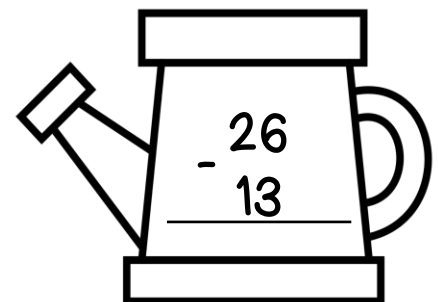
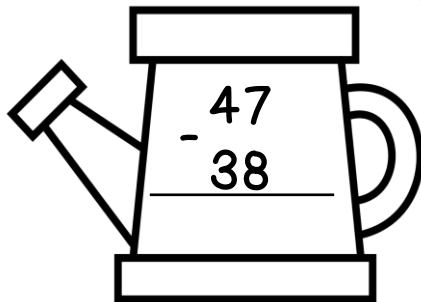
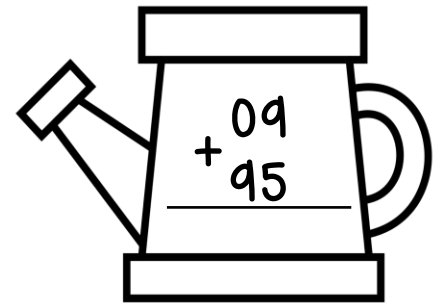

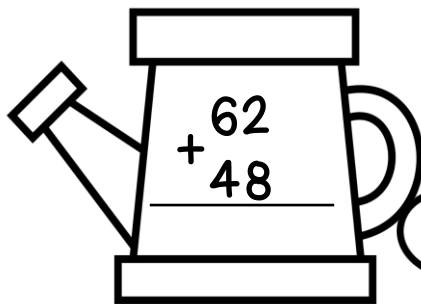
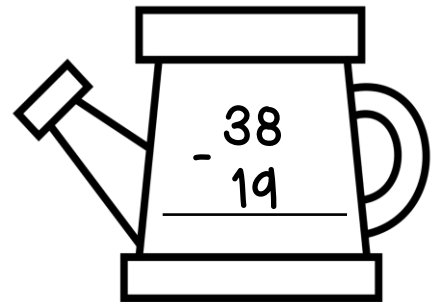
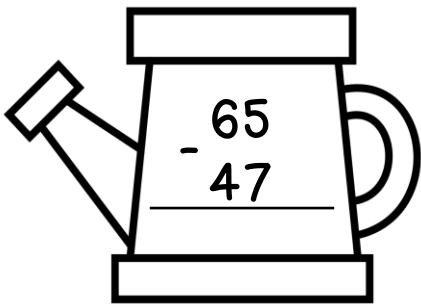
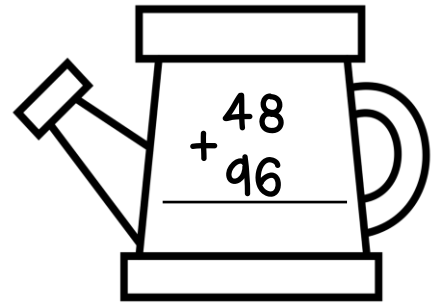

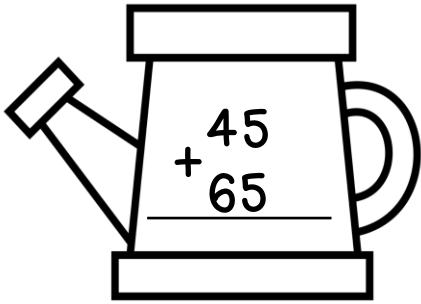
# Sumas

Mundo ABC



# operaciones


Mundo ABC





# TIRA LOS DADOS


1. Tira el dado y anota los puntos que obtuviste en el primer recuadro
2. Vuelve a tirar el dado y anota los puntos que obtuviste en el segundo recuadro.
3. Realiza la suma y anota el total.



$\square + \square = \square$	$\square + \square = \square$
$\square + \square = \square$	$\square + \square = \square$
$\square + \square = \square$	$\square + \square = \square$



# Sumas



Coloca los números en la tabla. Luego suma correctamente.

$54+14=$  \_\_\_

d u

+	

$12+67=$  \_\_\_

d u

+	

$80+25=$  \_\_\_

d u

+	

$87+42=$  \_\_\_

d u

+	

$45+16=$  \_\_\_

d u

+	

$95+10=$  \_\_\_

d u

+	



# Restas



Coloca los números en la tabla. Luego resta correctamente.

$58-13=$  \_\_\_

d      u

-	

$45-07=$  \_\_\_

d      u

-	

$66-13=$  \_\_\_

d      u

-	

$94-14=$  \_\_\_

d      u

-	

$81-09=$  \_\_\_

d      u

-	

$74-58=$  \_\_\_

d      u

-	

# Problemas razonados



1.- Valeria tiene \$526 pesos ahorrados, si su tía le regala \$485 pesos ¿Cuánto dinero tendrá en total?

Operación

Respuesta

-----




2.- La mamá de Pedro le compró 3 docenas de colores ¿Cuántos colores le compró en total?

Operación

Respuesta

-----



3.- En la panadería hicieron 100 donas, si vendieron 63 donas ¿Cuántas donas quedaron en total?

Operación

Respuesta

-----

# Problemas razonados



4. Si el kilo de manzanas cuesta \$56 pesos ¿Cuánto pagaré por 2 kilos?



Operación

Respuesta

-----




5. En el camión van 47 personas, si se bajan 13 ¿Cuántas personas quedaron?

Operación

Respuesta

-----



6.-Rosa vende ropa. El lunes vendió 12 piezas, el martes 23 piezas , el miércoles 17 piezas ¿Cuántas piezas vendió en total?

Operación

Respuesta

-----

