

Nombre _____ Fecha: _____

Instrucciones: colorea el resultado de la multiplicaciones según el código.

4x1

4x2

4x3

4x4

4x5


4x6

4x7

4x8

4x9

4x10



Nombre _____ Fecha: _____

Instrucciones: colorea el resultado de la multiplicaciones según el código.

5x1

5x2

5x3

5x4

5x5


5x6

5x7

5x8

5x9

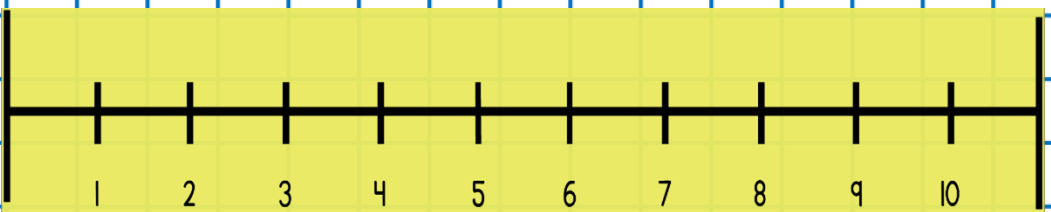


5x10



Nombre _____ Fecha: _____

By acrbio

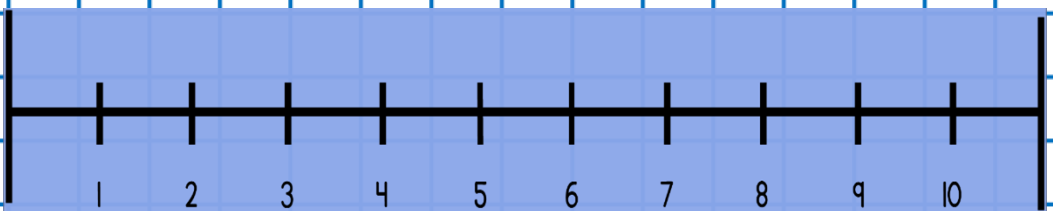
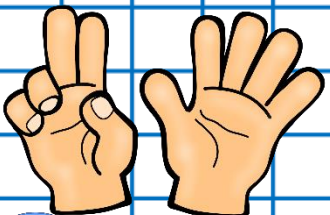
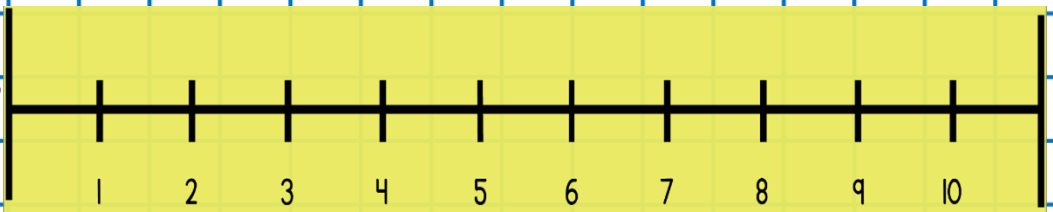
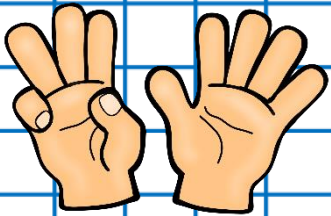
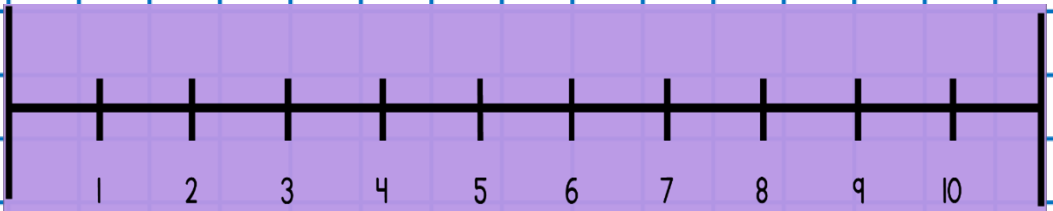
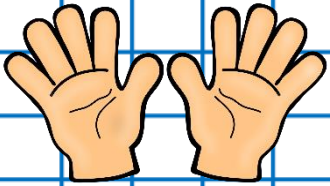
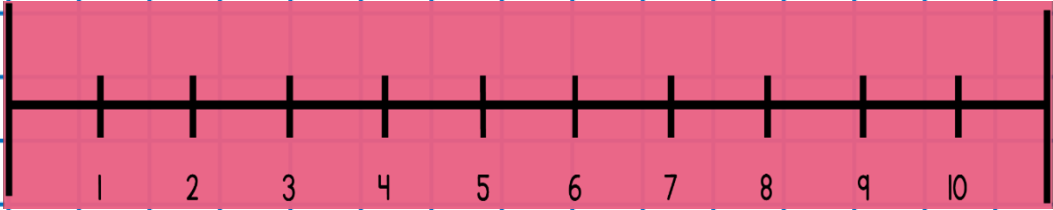
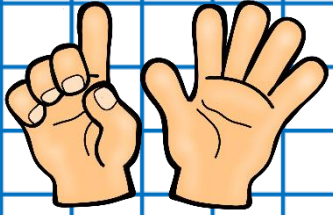
Instrucciones: completa la recta numérica.



Nombre _____ Fecha: _____

By acrbio


Instrucciones: completa la recta numérica.



Nombre _____ Fecha: _____

Instrucciones: completa.

ME LLAMO _____ MI
NOMBRE TIENE _____ LETRAS Y TENGO
_____ AÑOS.



VIVO EN LA CALLE _____
NÚMERO _____, DE _____ MI CIUDAD TIENE
_____ LETRAS.

MI CUMPLEAÑOS DE EL DÍA _____ DEL MES DE
_____, QUE ES EL MES NUMERO _____.

PESO _____ KG Y TENGO _____ HERMANOS Y
_____ HERMANAS



MI NUMERO PREFERIDO ES EL _____
COLOREA TUS NÚMEROS.

1	2	3	4	5	6	7	8	9	10
11	12	13	14	15	16	17	18	19	20
21	22	23	24	25	26	27	28	29	30




Nombre _____ Fecha: _____

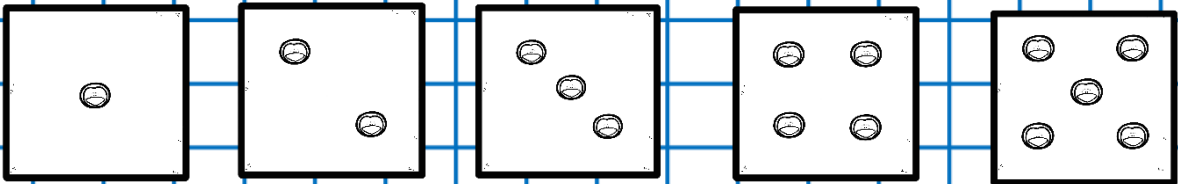
Instrucciones:

Cuántas letras tiene tu nombre


Colorea los años que tienes.



Cuántos hermanos y hermanas tienes.



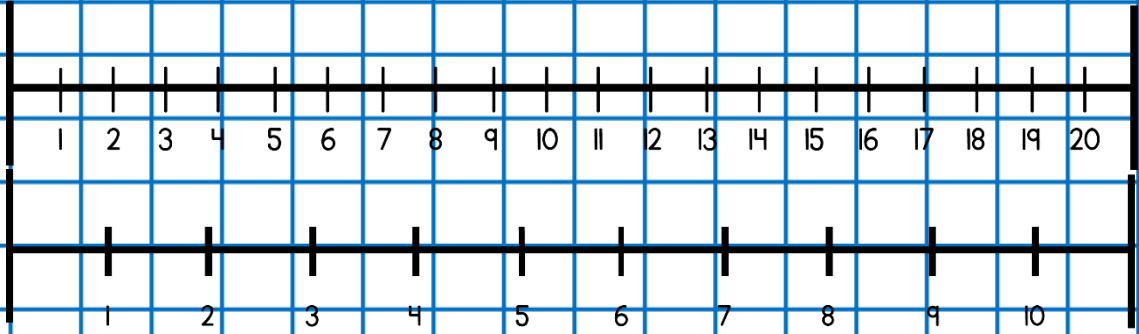
Cuántos años tiene tu papá y tu mamá.



Nombre _____ Fecha: _____

Instrucciones:


Cuantos niños hay en tu clase.



Tu numero favorito es el

A rectangular box with a decorative flower on top, intended for writing the favorite number.

Cual es el nombre de tu calle _____ y su número _____



Cuantos años tienen tus hermanos.

Four square boxes with a decorative border of small circles, intended for writing the ages of siblings.



Nombre _____ Fecha: _____

Instrucciones:


Colorea las fichas para representar la cantidad numérica indicada.



Rojas valen 10



Azules valen 1



24

○	○	○	○	○	○	○	○	○	○
○	○	○	○	○	○	○	○	○	○

35

○	○	○	○	○	○	○	○	○	○
○	○	○	○	○	○	○	○	○	○

18

○	○	○	○	○	○	○	○	○	○
○	○	○	○	○	○	○	○	○	○

Nombre _____ Fecha: _____

Instrucciones:


Colorea las fichas para representar la cantidad numérica indicada.



Rojas valen 10



Azules valen 1



28

○	○	○	○	○	○	○	○	○	○
○	○	○	○	○	○	○	○	○	○

78

○	○	○	○	○	○	○	○	○	○
○	○	○	○	○	○	○	○	○	○

96

○	○	○	○	○	○	○	○	○	○
○	○	○	○	○	○	○	○	○	○

Nombre _____ Fecha: _____

Instrucciones:

Colorea las fichas para representar la cantidad numérica indicada.



Rojas valen 10



Azules valen 1



11

○	○	○	○	○	○	○	○	○	○
○	○	○	○	○	○	○	○	○	○

25

○	○	○	○	○	○	○	○	○	○
○	○	○	○	○	○	○	○	○	○


39

○	○	○	○	○	○	○	○	○	○
○	○	○	○	○	○	○	○	○	○

Nombre _____ Fecha: _____

Instrucciones: completa los cuadros.

	D	U
24		
35		
69		
75		
44		
67		



	D	U
	1	9
	6	5
	4	7
	2	3
	3	8
	9	8


	D	U
dieciocho		
cuarenta y dos		
treinta y nueve		
sesenta y cuatro		
veinticuatro		
noventa y cinco		



Nombre _____ Fecha: _____

Instrucciones: Completa los cuadros.

	D	U
56		
23		
58		
78		
68		
34		



	D	U
	8	9
	2	4
	0	3
	7	9
	3	4
	4	7

	D	U
quince		
cuarenta y tres		
noventa y nueve		
cincuenta y cuatro		
treinta y cinco		
noventa y ocho		

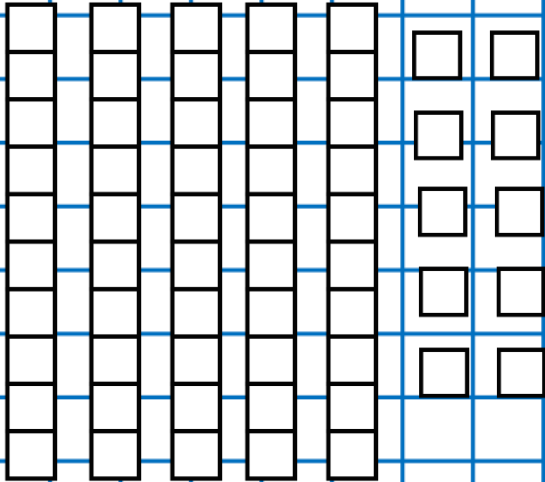


Nombre _____ Fecha: _____

By acrbio

Instrucciones: colorea los bloques.

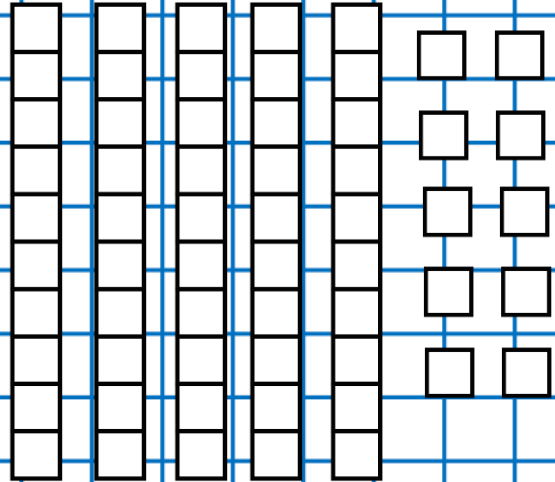
44



Decenas _____

Unidades _____

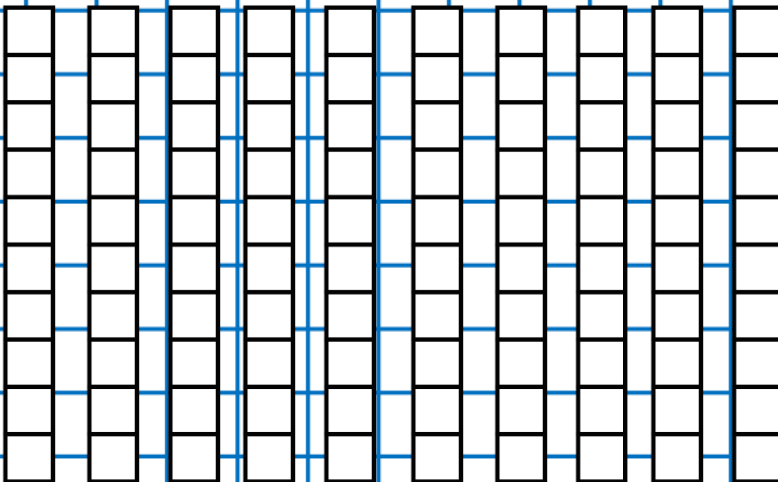
28



Decenas _____

Unidades _____

74



Decenas _____

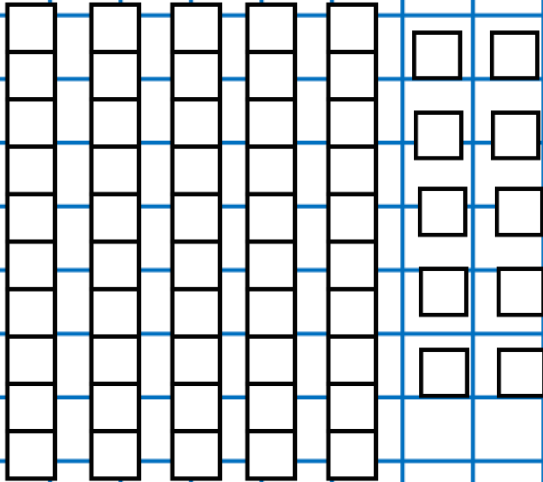
Unidades _____

Nombre _____ Fecha: _____

By acrbio

Instrucciones: colorea los bloques.

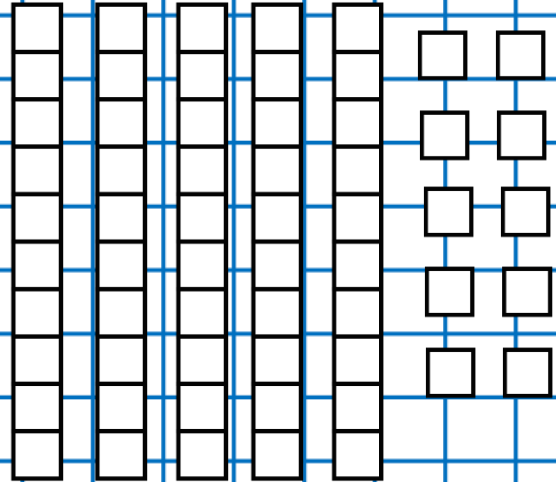
26



Decenas _____

Unidades _____

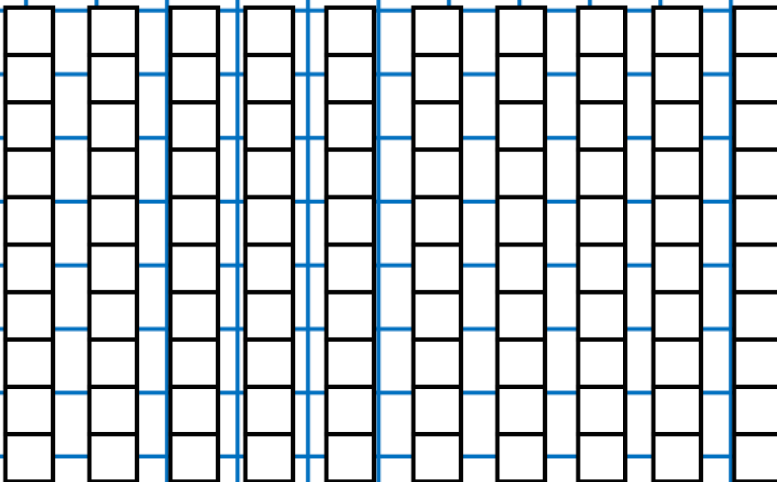
44



Decenas _____

Unidades _____

96



Decenas _____

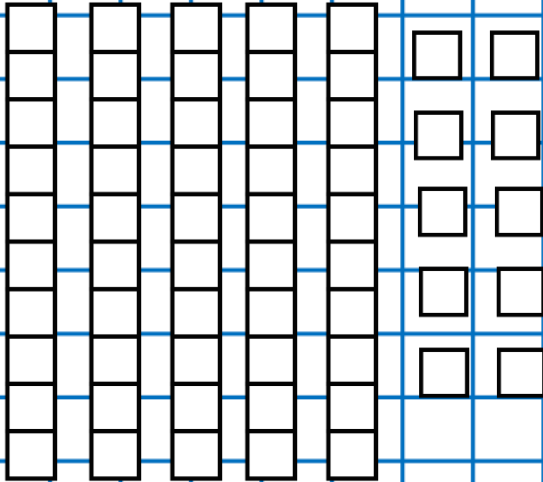
Unidades _____

Nombre _____ Fecha: _____

By acrbio

Instrucciones: colorea los bloques.

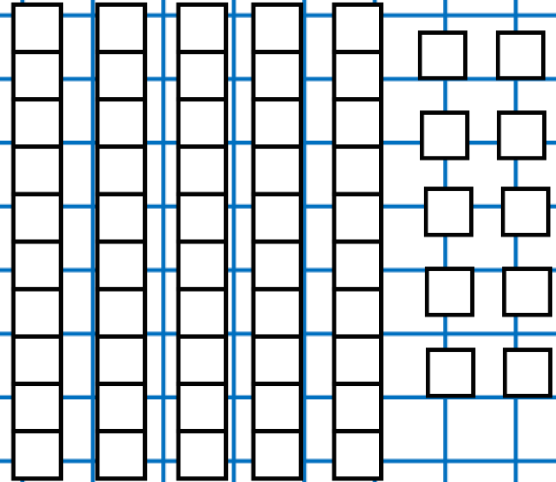
11



Decenas _____

Unidades _____


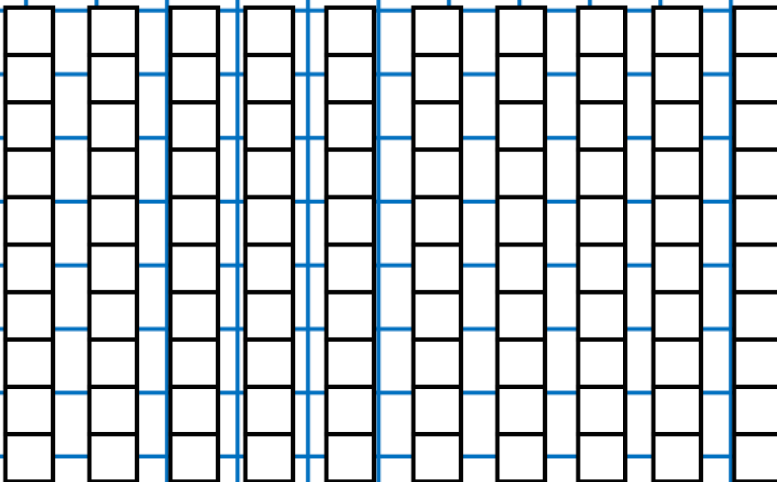
32



Decenas _____

Unidades _____

85




Decenas _____

Unidades _____

Nombre _____ Fecha: _____

By acrbio



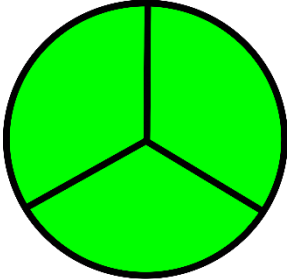









Instrucciones: Señala el número 1.



Nombre _____ Fecha: _____

By acrbio













Instrucciones: Señala el número 2.

Nombre _____ Fecha: _____

By acrbio

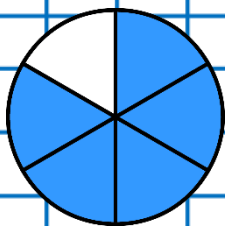
Instrucciones: Señala el número 3.

Nombre _____ Fecha: _____

By acrbio

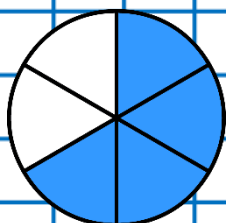
Instrucciones: colorea la respuesta correcta.



$\frac{1}{6}$

$\frac{4}{6}$

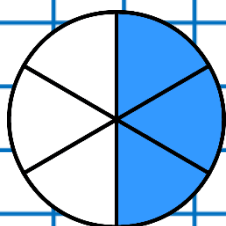
$\frac{5}{6}$



$\frac{3}{6}$

$\frac{4}{6}$

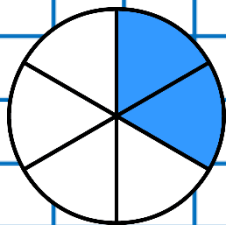
$\frac{6}{6}$



$\frac{3}{6}$

$\frac{5}{6}$

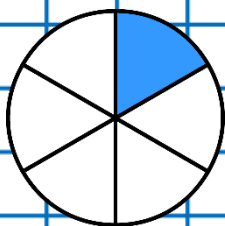
$\frac{4}{6}$



$\frac{1}{6}$

$\frac{3}{6}$

$\frac{2}{6}$



$\frac{2}{6}$

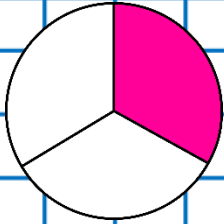
$\frac{1}{6}$

$\frac{3}{6}$

Nombre _____ Fecha: _____

By acrbio

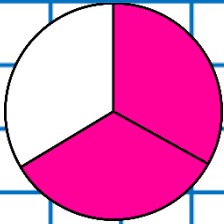
Instrucciones: colorea la respuesta correcta.



$\frac{1}{3}$

$\frac{3}{3}$


$\frac{2}{3}$



$\frac{3}{3}$

$\frac{2}{3}$

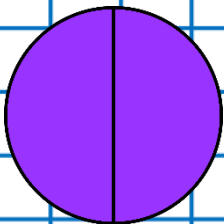
$\frac{2}{3}$



$\frac{3}{3}$

$\frac{2}{3}$


$\frac{1}{3}$



$\frac{1}{2}$

$\frac{3}{2}$

$\frac{2}{2}$



$\frac{2}{2}$

$\frac{1}{2}$

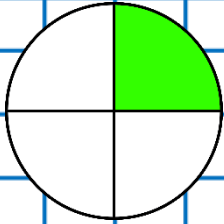
$\frac{3}{2}$



Nombre _____ Fecha: _____

By acrbio

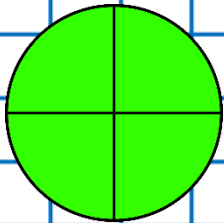
Instrucciones: colorea la respuesta correcta.



$\frac{1}{4}$

$\frac{2}{4}$

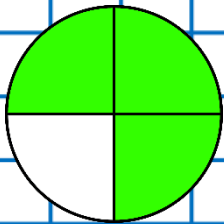
$\frac{3}{4}$



$\frac{3}{4}$

$\frac{4}{4}$

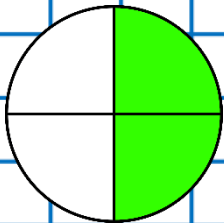
$\frac{1}{4}$



$\frac{3}{4}$

$\frac{5}{4}$

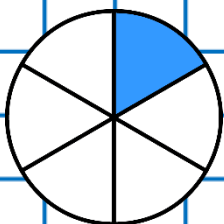
$\frac{4}{4}$



$\frac{4}{4}$

$\frac{2}{4}$

$\frac{3}{4}$



$\frac{3}{6}$

$\frac{2}{6}$

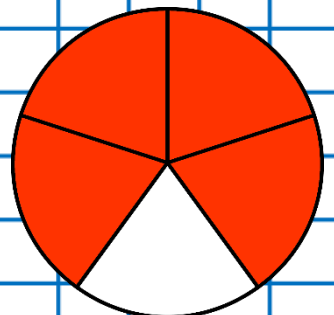
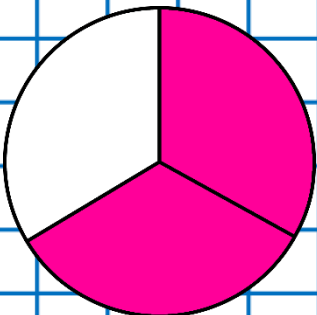
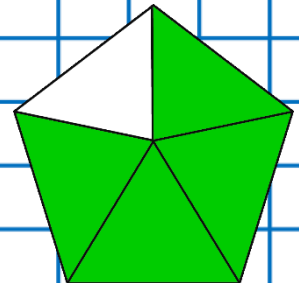
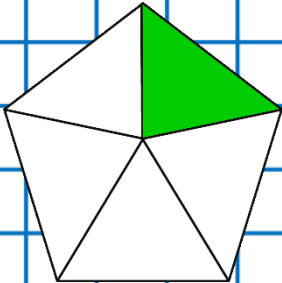
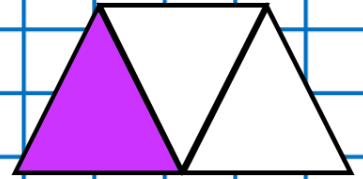
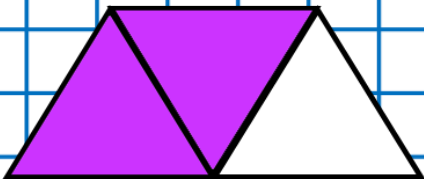
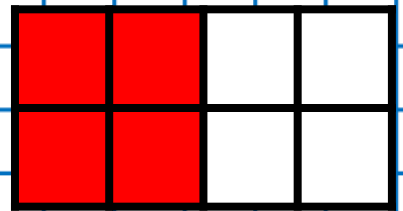
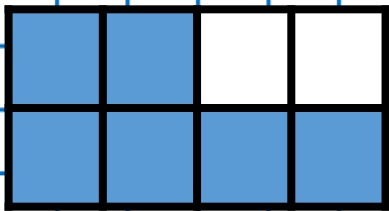


$\frac{1}{6}$



Nombre _____ Fecha: _____

By acrbio

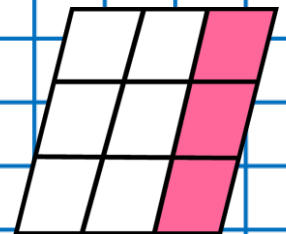
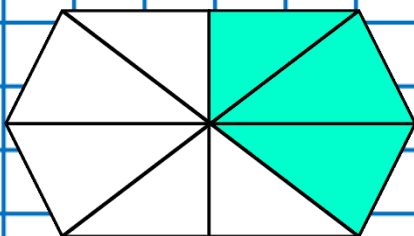

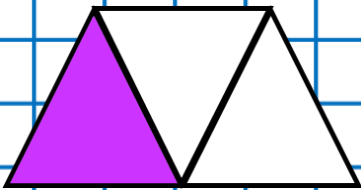
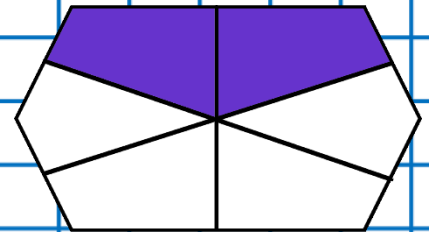
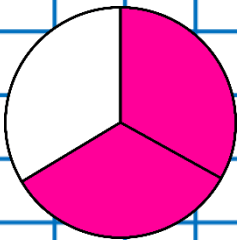
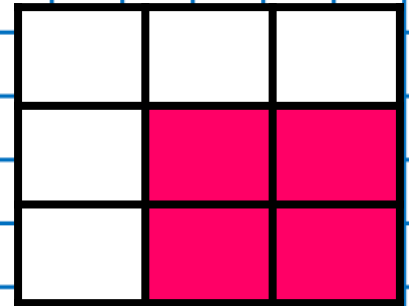


Instrucciones: escribe la fracción correcta.



Nombre _____ Fecha: _____

By acrbio


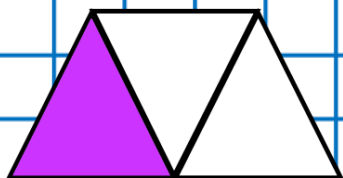

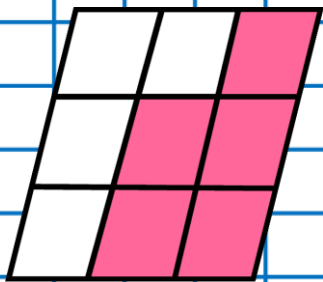

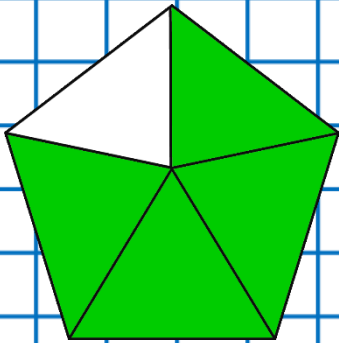
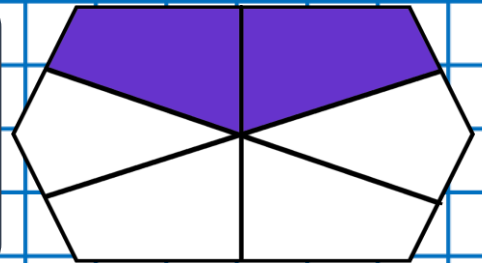

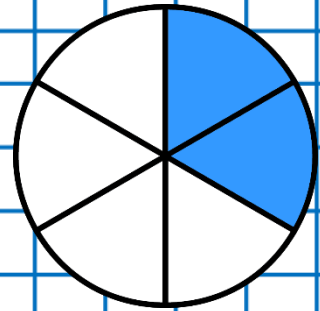

Instrucciones: escribe la fracción correcta.



Nombre _____ Fecha: _____

By acrbio

Instrucciones: escribe la fracción correcta.



Nombre _____ Fecha: _____

By acrbio

Instrucciones: escribe la fracción correcta.

