



Realiza las siguientes sumas con una cifra

<https://www.imageneseducativas.com/>


$$\begin{array}{r} + 9 \\ 6 \\ \hline \end{array}$$




$$\begin{array}{r} + 4 \\ 7 \\ \hline \end{array}$$




$$\begin{array}{r} + 4 \\ 9 \\ \hline \end{array}$$




$$\begin{array}{r} + 8 \\ 4 \\ \hline \end{array}$$




$$\begin{array}{r} + 7 \\ 6 \\ \hline \end{array}$$




$$\begin{array}{r} + 6 \\ 8 \\ \hline \end{array}$$




$$\begin{array}{r} + 8 \\ 8 \\ \hline \end{array}$$




$$\begin{array}{r} + 8 \\ 9 \\ \hline \end{array}$$




$$\begin{array}{r} + 4 \\ 1 \\ \hline \end{array}$$




$$\begin{array}{r} + 3 \\ 5 \\ \hline \end{array}$$




$$\begin{array}{r} + 2 \\ 7 \\ \hline \end{array}$$




$$\begin{array}{r} + 9 \\ 5 \\ \hline \end{array}$$




$$\begin{array}{r} + 4 \\ 5 \\ \hline \end{array}$$




$$\begin{array}{r} + 4 \\ 7 \\ \hline \end{array}$$




$$\begin{array}{r} + 8 \\ 7 \\ \hline \end{array}$$




$$\begin{array}{r} + 6 \\ 2 \\ \hline \end{array}$$




$$\begin{array}{r} + 3 \\ 7 \\ \hline \end{array}$$




$$\begin{array}{r} + 1 \\ 9 \\ \hline \end{array}$$



$$\begin{array}{r} + 9 \\ 8 \\ \hline \end{array}$$



$$\begin{array}{r} + 3 \\ 8 \\ \hline \end{array}$$



Nombre _____


Curso: _____




Realiza las siguientes sumas con una cifra

<https://www.imageneseducativas.com/>


$$\begin{array}{r} + 9 \\ + 5 \\ \hline \end{array}$$




$$\begin{array}{r} + 7 \\ + 3 \\ \hline \end{array}$$



$$\begin{array}{r} + 7 \\ + 3 \\ \hline \end{array}$$




$$\begin{array}{r} + 6 \\ + 9 \\ \hline \end{array}$$




$$\begin{array}{r} + 3 \\ + 7 \\ \hline \end{array}$$




$$\begin{array}{r} + 6 \\ + 7 \\ \hline \end{array}$$




$$\begin{array}{r} + 3 \\ + 5 \\ \hline \end{array}$$




$$\begin{array}{r} + 9 \\ + 4 \\ \hline \end{array}$$




$$\begin{array}{r} + 3 \\ + 5 \\ \hline \end{array}$$




$$\begin{array}{r} + 4 \\ + 2 \\ \hline \end{array}$$




$$\begin{array}{r} + 3 \\ + 8 \\ \hline \end{array}$$




$$\begin{array}{r} + 8 \\ + 7 \\ \hline \end{array}$$




$$\begin{array}{r} + 5 \\ + 4 \\ \hline \end{array}$$




$$\begin{array}{r} + 7 \\ + 9 \\ \hline \end{array}$$




$$\begin{array}{r} + 5 \\ + 9 \\ \hline \end{array}$$




$$\begin{array}{r} + 3 \\ + 4 \\ \hline \end{array}$$




$$\begin{array}{r} + 1 \\ + 5 \\ \hline \end{array}$$




$$\begin{array}{r} + 1 \\ + 7 \\ \hline \end{array}$$



$$\begin{array}{r} + 3 \\ + 7 \\ \hline \end{array}$$



$$\begin{array}{r} + 9 \\ + 5 \\ \hline \end{array}$$



Nombre _____


Curso: _____




Realiza las siguientes sumas con una cifra

<https://www.imageneseducativas.com/>


$$\begin{array}{r} + 7 \\ 8 \\ \hline \end{array}$$




$$\begin{array}{r} + 4 \\ 3 \\ \hline \end{array}$$




$$\begin{array}{r} + 9 \\ 8 \\ \hline \end{array}$$




$$\begin{array}{r} + 6 \\ 1 \\ \hline \end{array}$$




$$\begin{array}{r} + 5 \\ 6 \\ \hline \end{array}$$




$$\begin{array}{r} + 9 \\ 4 \\ \hline \end{array}$$




$$\begin{array}{r} + 1 \\ 5 \\ \hline \end{array}$$




$$\begin{array}{r} + 8 \\ 8 \\ \hline \end{array}$$




$$\begin{array}{r} + 6 \\ 2 \\ \hline \end{array}$$




$$\begin{array}{r} + 5 \\ 2 \\ \hline \end{array}$$




$$\begin{array}{r} + 5 \\ 1 \\ \hline \end{array}$$




$$\begin{array}{r} + 1 \\ 6 \\ \hline \end{array}$$




$$\begin{array}{r} + 1 \\ 8 \\ \hline \end{array}$$




$$\begin{array}{r} + 5 \\ 7 \\ \hline \end{array}$$




$$\begin{array}{r} + 7 \\ 9 \\ \hline \end{array}$$




$$\begin{array}{r} + 2 \\ 3 \\ \hline \end{array}$$




$$\begin{array}{r} + 6 \\ 7 \\ \hline \end{array}$$




$$\begin{array}{r} + 6 \\ 6 \\ \hline \end{array}$$



$$\begin{array}{r} + 4 \\ 7 \\ \hline \end{array}$$



$$\begin{array}{r} + 5 \\ 4 \\ \hline \end{array}$$



Nombre _____


Curso: _____




Realiza las siguientes sumas con una cifra

<https://www.imageneseducativas.com/>


$$\begin{array}{r} + 4 \\ 8 \\ \hline \end{array}$$




$$\begin{array}{r} + 5 \\ 1 \\ \hline \end{array}$$




$$\begin{array}{r} + 7 \\ 9 \\ \hline \end{array}$$




$$\begin{array}{r} + 5 \\ 8 \\ \hline \end{array}$$




$$\begin{array}{r} + 6 \\ 9 \\ \hline \end{array}$$




$$\begin{array}{r} + 6 \\ 5 \\ \hline \end{array}$$




$$\begin{array}{r} + 2 \\ 7 \\ \hline \end{array}$$




$$\begin{array}{r} + 9 \\ 8 \\ \hline \end{array}$$




$$\begin{array}{r} + 5 \\ 3 \\ \hline \end{array}$$




$$\begin{array}{r} + 6 \\ 6 \\ \hline \end{array}$$




$$\begin{array}{r} + 1 \\ 8 \\ \hline \end{array}$$



$$\begin{array}{r} + 1 \\ 8 \\ \hline \end{array}$$




$$\begin{array}{r} + 5 \\ 2 \\ \hline \end{array}$$




$$\begin{array}{r} + 1 \\ 4 \\ \hline \end{array}$$



$$\begin{array}{r} + 7 \\ 8 \\ \hline \end{array}$$




$$\begin{array}{r} + 1 \\ 9 \\ \hline \end{array}$$




$$\begin{array}{r} + 8 \\ 9 \\ \hline \end{array}$$



$$\begin{array}{r} + 3 \\ 7 \\ \hline \end{array}$$



$$\begin{array}{r} + 5 \\ 6 \\ \hline \end{array}$$



$$\begin{array}{r} + 6 \\ 2 \\ \hline \end{array}$$



Nombre _____


Curso: _____




Realiza las siguientes sumas con una cifra

<https://www.imageneseducativas.com/>


$$\begin{array}{r} + 9 \\ + 2 \\ \hline \end{array}$$




$$\begin{array}{r} + 6 \\ + 5 \\ \hline \end{array}$$



$$\begin{array}{r} + 1 \\ + 7 \\ \hline \end{array}$$




$$\begin{array}{r} + 6 \\ + 4 \\ \hline \end{array}$$




$$\begin{array}{r} + 8 \\ + 9 \\ \hline \end{array}$$




$$\begin{array}{r} + 7 \\ + 8 \\ \hline \end{array}$$




$$\begin{array}{r} + 5 \\ + 7 \\ \hline \end{array}$$




$$\begin{array}{r} + 5 \\ + 4 \\ \hline \end{array}$$




$$\begin{array}{r} + 6 \\ + 5 \\ \hline \end{array}$$




$$\begin{array}{r} + 4 \\ + 4 \\ \hline \end{array}$$




$$\begin{array}{r} + 9 \\ + 9 \\ \hline \end{array}$$




$$\begin{array}{r} + 9 \\ + 1 \\ \hline \end{array}$$




$$\begin{array}{r} + 7 \\ + 2 \\ \hline \end{array}$$




$$\begin{array}{r} + 3 \\ + 2 \\ \hline \end{array}$$




$$\begin{array}{r} + 3 \\ + 5 \\ \hline \end{array}$$




$$\begin{array}{r} + 8 \\ + 3 \\ \hline \end{array}$$




$$\begin{array}{r} + 2 \\ + 7 \\ \hline \end{array}$$




$$\begin{array}{r} + 6 \\ + 9 \\ \hline \end{array}$$



$$\begin{array}{r} + 9 \\ + 5 \\ \hline \end{array}$$



$$\begin{array}{r} + 9 \\ + 9 \\ \hline \end{array}$$



Nombre _____

Curso: _____

