



# LABERITOS MATEMÁTICOS DE SUMAS



$\begin{array}{r} 5 \\ +4 \\ \hline \end{array}$	0	7	$\begin{array}{r} 4 \\ +3 \\ \hline \end{array}$	8	7	$\begin{array}{r} 5 \\ +2 \\ \hline \end{array}$
9			6			8
$\begin{array}{r} 3 \\ +1 \\ \hline \end{array}$	0	7	$\begin{array}{r} 5 \\ +2 \\ \hline \end{array}$	6	7	$\begin{array}{r} 5 \\ +2 \\ \hline \end{array}$
4			6			6
$\begin{array}{r} 6 \\ +2 \\ \hline \end{array}$	8	6	$\begin{array}{r} 6 \\ +2 \\ \hline \end{array}$	7	7	$\begin{array}{r} 5 \\ +2 \\ \hline \end{array}$
5			8			6

Ayuda al niño a encontrar la salida.

# LABERITOS MATEMÁTICOS DE SUMAS




A maze of mathematical addition problems. The maze is a grid of 4 rows and 4 columns of cells. The start is at the top-left cell, and the end is at the bottom-right cell. A red dashed line shows the path through the maze.

$\begin{array}{r} 5 \\ +4 \\ \hline 9 \end{array}$	0	7	$\begin{array}{r} 4 \\ +3 \\ \hline 6 \end{array}$	8	7	$\begin{array}{r} 5 \\ +2 \\ \hline 8 \end{array}$
3			5			5
$\begin{array}{r} 3 \\ +1 \\ \hline 4 \end{array}$	0	7	$\begin{array}{r} 5 \\ +2 \\ \hline 6 \end{array}$	6	7	$\begin{array}{r} 5 \\ +2 \\ \hline 6 \end{array}$
4			6			6
$\begin{array}{r} 6 \\ +2 \\ \hline 8 \end{array}$	8	6	$\begin{array}{r} 6 \\ +2 \\ \hline 8 \end{array}$	7	7	$\begin{array}{r} 5 \\ +2 \\ \hline 6 \end{array}$
5			8			6

Ayuda al niño a encontrar la salida.


# LABERITOS MATEMÁTICOS DE SUMAS



$\begin{array}{r} 5 \\ +4 \\ \hline \end{array}$	0	7	$\begin{array}{r} 2 \\ +3 \\ \hline \end{array}$	5	7	$\begin{array}{r} 5 \\ +1 \\ \hline \end{array}$
9			6			6
$\begin{array}{r} 3 \\ +1 \\ \hline \end{array}$	0	7	$\begin{array}{r} 5 \\ +4 \\ \hline \end{array}$	6	8	$\begin{array}{r} 6 \\ +2 \\ \hline \end{array}$
4			9			6
$\begin{array}{r} 6 \\ +3 \\ \hline \end{array}$	8	3	$\begin{array}{r} 1 \\ +2 \\ \hline \end{array}$	7	7	$\begin{array}{r} 5 \\ +2 \\ \hline \end{array}$
9			8			6

Ayuda al niño a encontrar la salida.

# LABERITOS MATEMÁTICOS DE SUMAS




A maze of mathematical addition problems. The path is marked by a red dashed line.

$\begin{array}{r} 5 \\ +4 \\ \hline \end{array}$	0	7	$\begin{array}{r} 2 \\ +3 \\ \hline \end{array}$	5	7	$\begin{array}{r} 5 \\ +1 \\ \hline \end{array}$
9			6			6
$\begin{array}{r} 3 \\ +1 \\ \hline \end{array}$	0	7	$\begin{array}{r} 5 \\ +4 \\ \hline \end{array}$	6	8	$\begin{array}{r} 6 \\ +2 \\ \hline \end{array}$
4			9			6
$\begin{array}{r} 6 \\ +3 \\ \hline \end{array}$	8	3	$\begin{array}{r} 1 \\ +2 \\ \hline \end{array}$	7	7	$\begin{array}{r} 5 \\ +2 \\ \hline \end{array}$
9			8			6

Ayuda al niño a encontrar la salida.

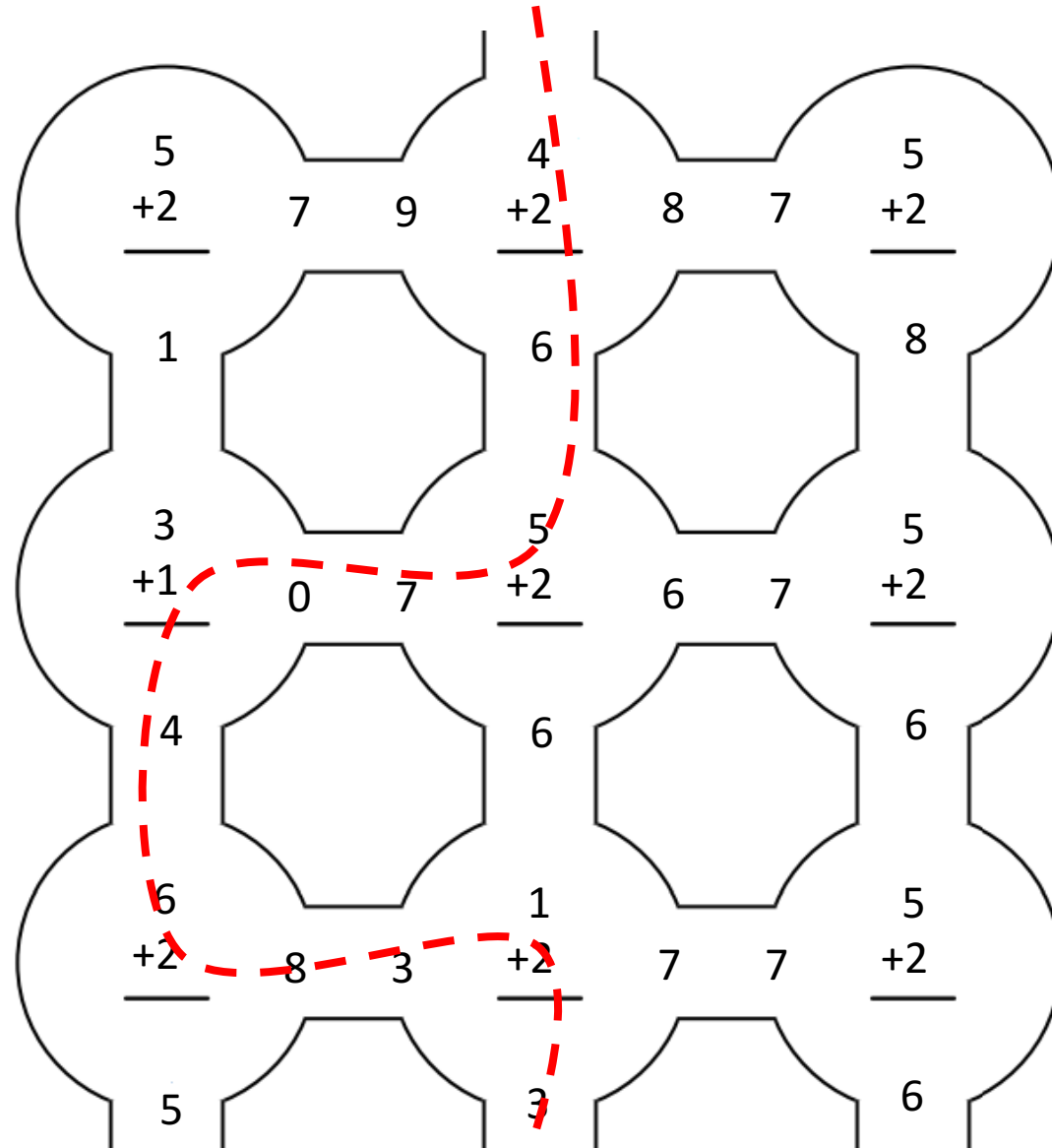
# LABERITOS MATEMÁTICOS DE SUMAS



$\begin{array}{r} 5 \\ +2 \\ \hline \end{array}$	7	9	$\begin{array}{r} 4 \\ +2 \\ \hline \end{array}$	8	7	$\begin{array}{r} 5 \\ +2 \\ \hline \end{array}$
1			6			8
$\begin{array}{r} 3 \\ +1 \\ \hline \end{array}$	0	7	$\begin{array}{r} 5 \\ +2 \\ \hline \end{array}$	6	7	$\begin{array}{r} 5 \\ +2 \\ \hline \end{array}$
4			6			6
$\begin{array}{r} 6 \\ +2 \\ \hline \end{array}$	8	3	$\begin{array}{r} 1 \\ +2 \\ \hline \end{array}$	7	7	$\begin{array}{r} 5 \\ +2 \\ \hline \end{array}$
5			3			6


Ayuda al niño a encontrar la salida.

# LABERITOS MATEMÁTICOS INICIALES



Ayuda al niño a encontrar la salida.

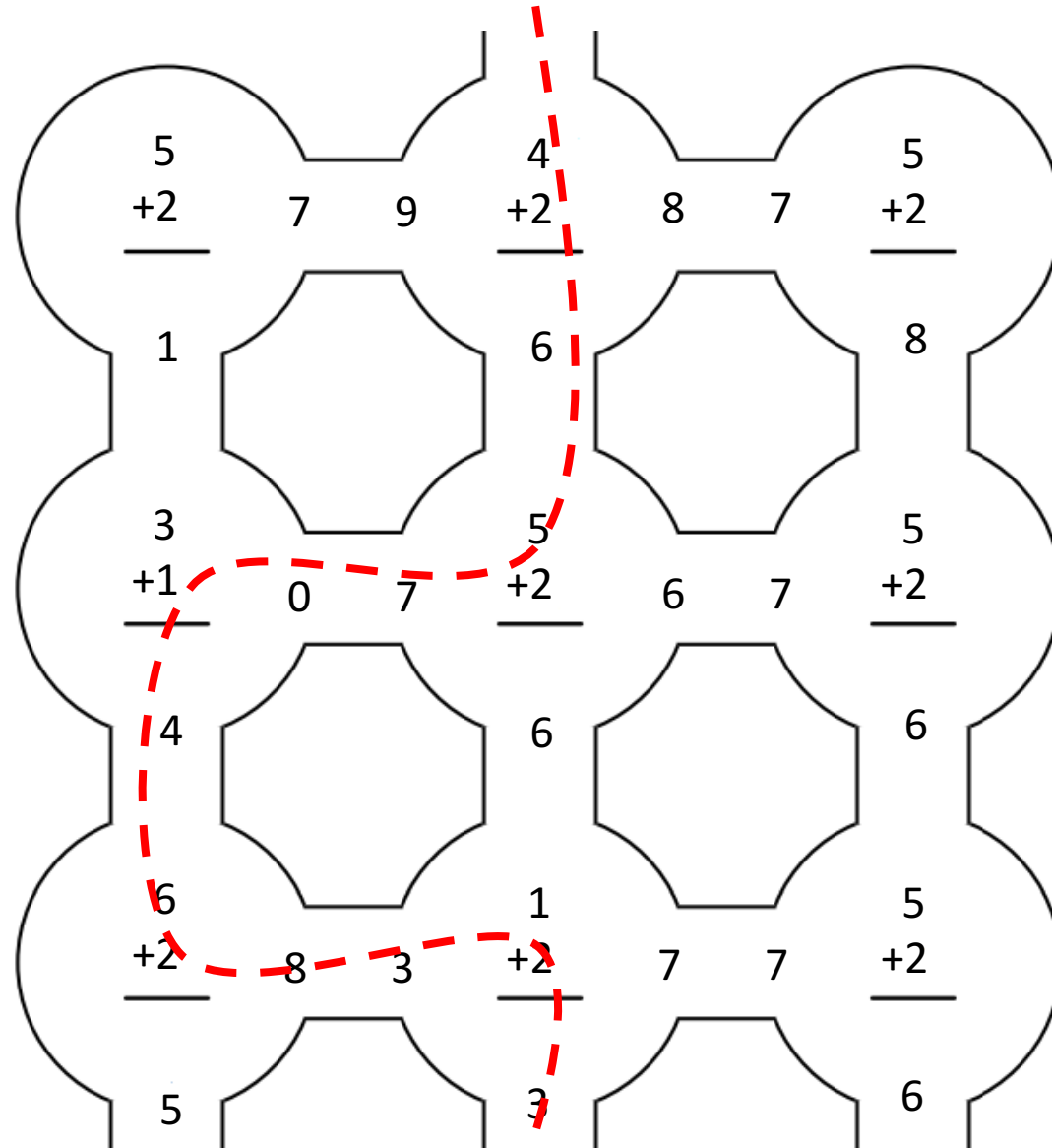
# LABERITOS MATEMÁTICOS DE SUMAS



$\begin{array}{r} 5 \\ +2 \\ \hline \end{array}$	7	9	$\begin{array}{r} 4 \\ +1 \\ \hline \end{array}$	8	7	$\begin{array}{r} 5 \\ +2 \\ \hline \end{array}$
1			5			8
$\begin{array}{r} 3 \\ +1 \\ \hline \end{array}$	0	7	$\begin{array}{r} 5 \\ +3 \\ \hline \end{array}$	8	7	$\begin{array}{r} 1 \\ +1 \\ \hline \end{array}$
4			6			2
$\begin{array}{r} 6 \\ +2 \\ \hline \end{array}$	8	3	$\begin{array}{r} 8 \\ +1 \\ \hline \end{array}$	7	5	$\begin{array}{r} 3 \\ +2 \\ \hline \end{array}$
5			9			6

Ayuda al niño a encontrar la salida.

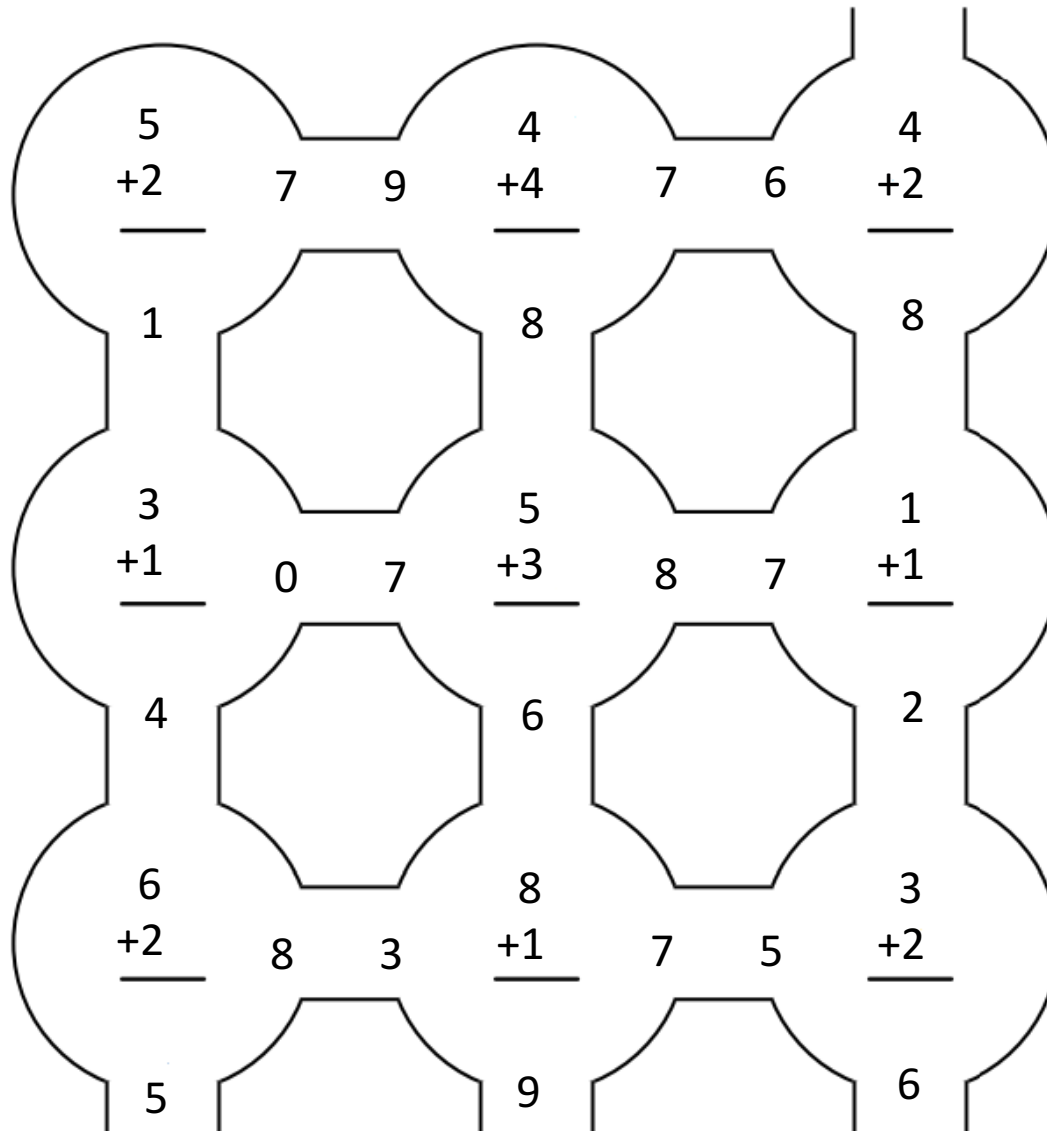
# LABERITOS MATEMÁTICOS INICIALES



Ayuda al niño a encontrar la salida.

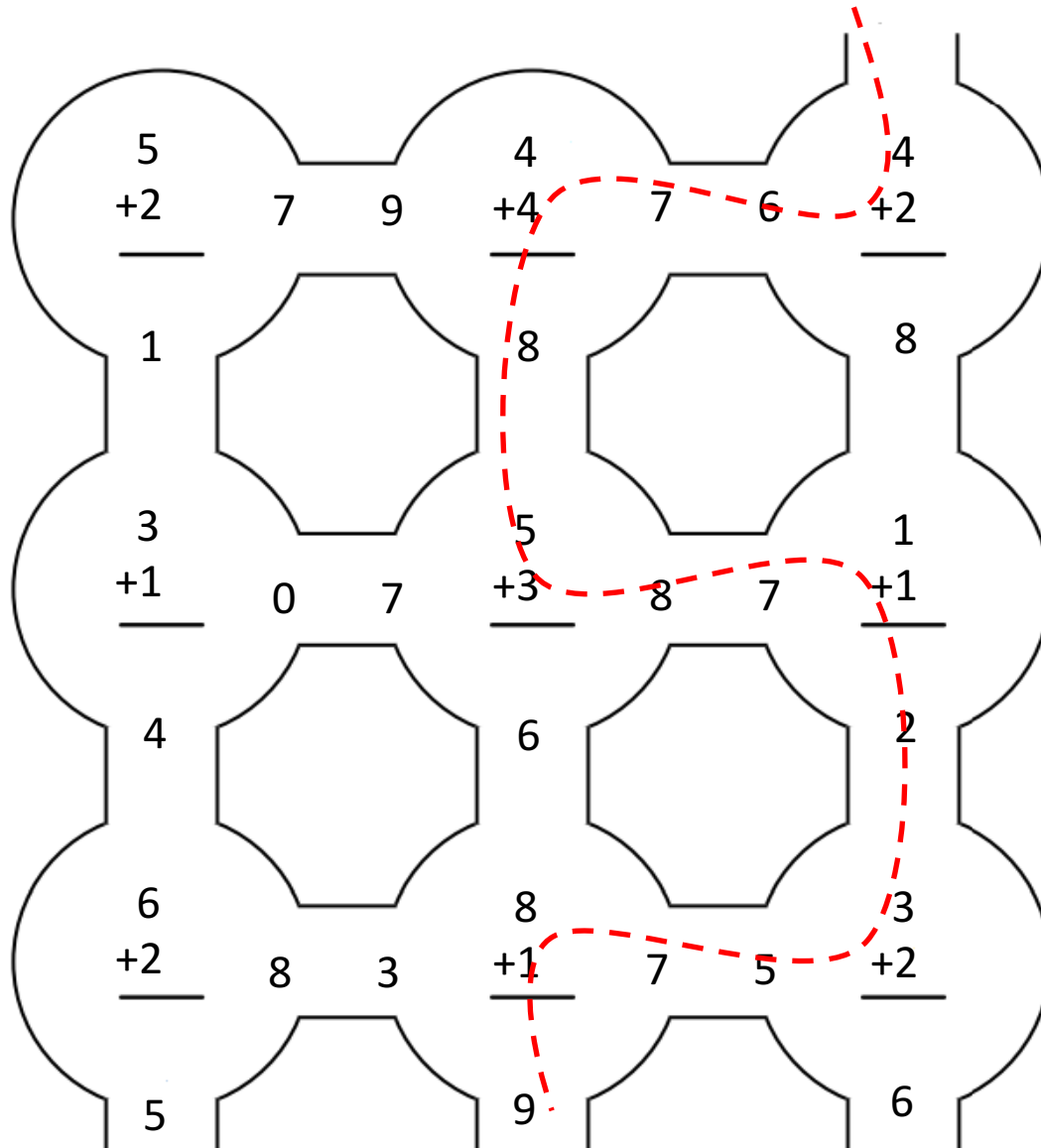


# LABERITOS MATEMÁTICOS DE SUMAS



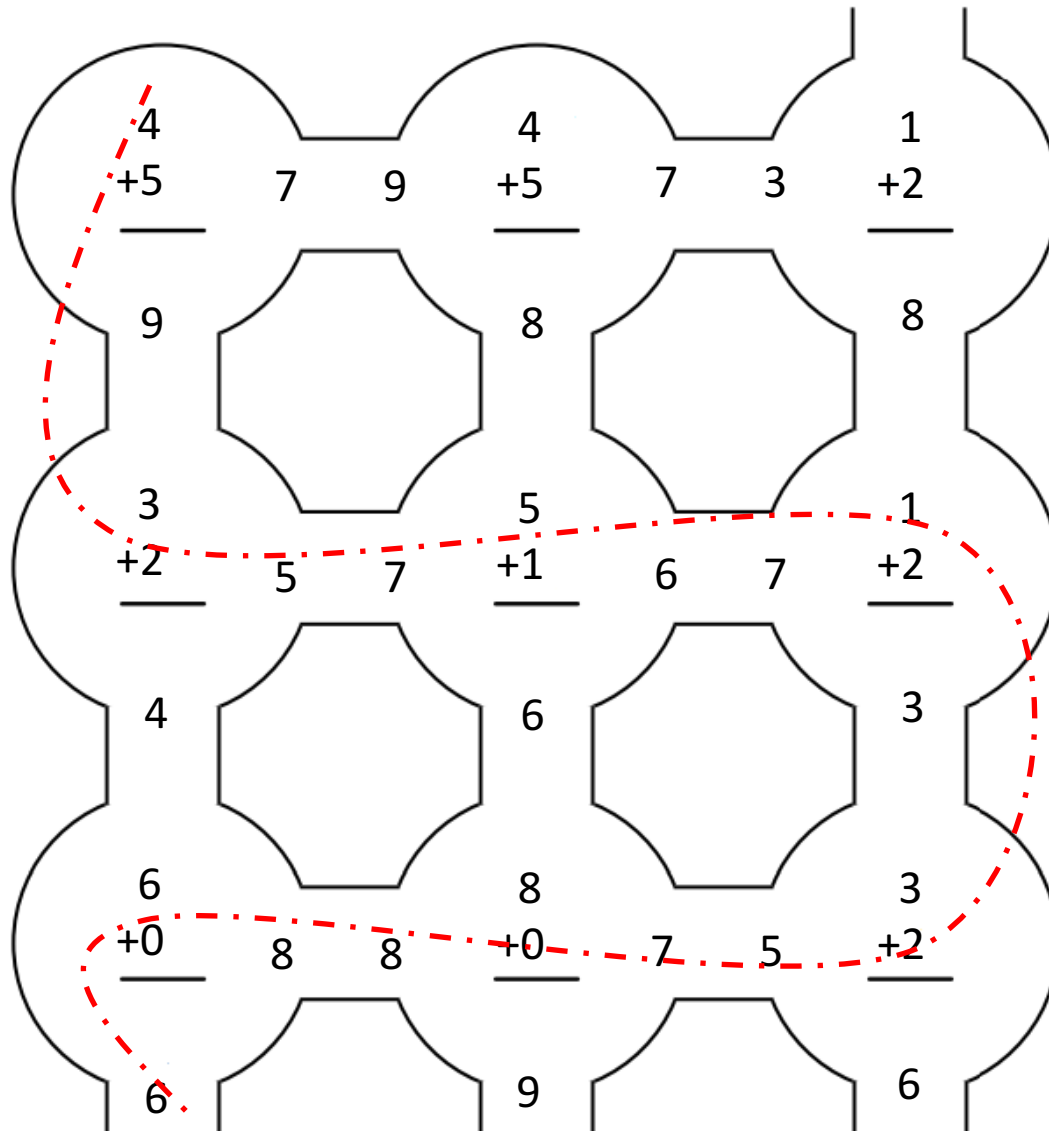
*Ayuda al niño a encontrar la salida.*

# LABERITOS MATEMÁTICOS DE SUMAS



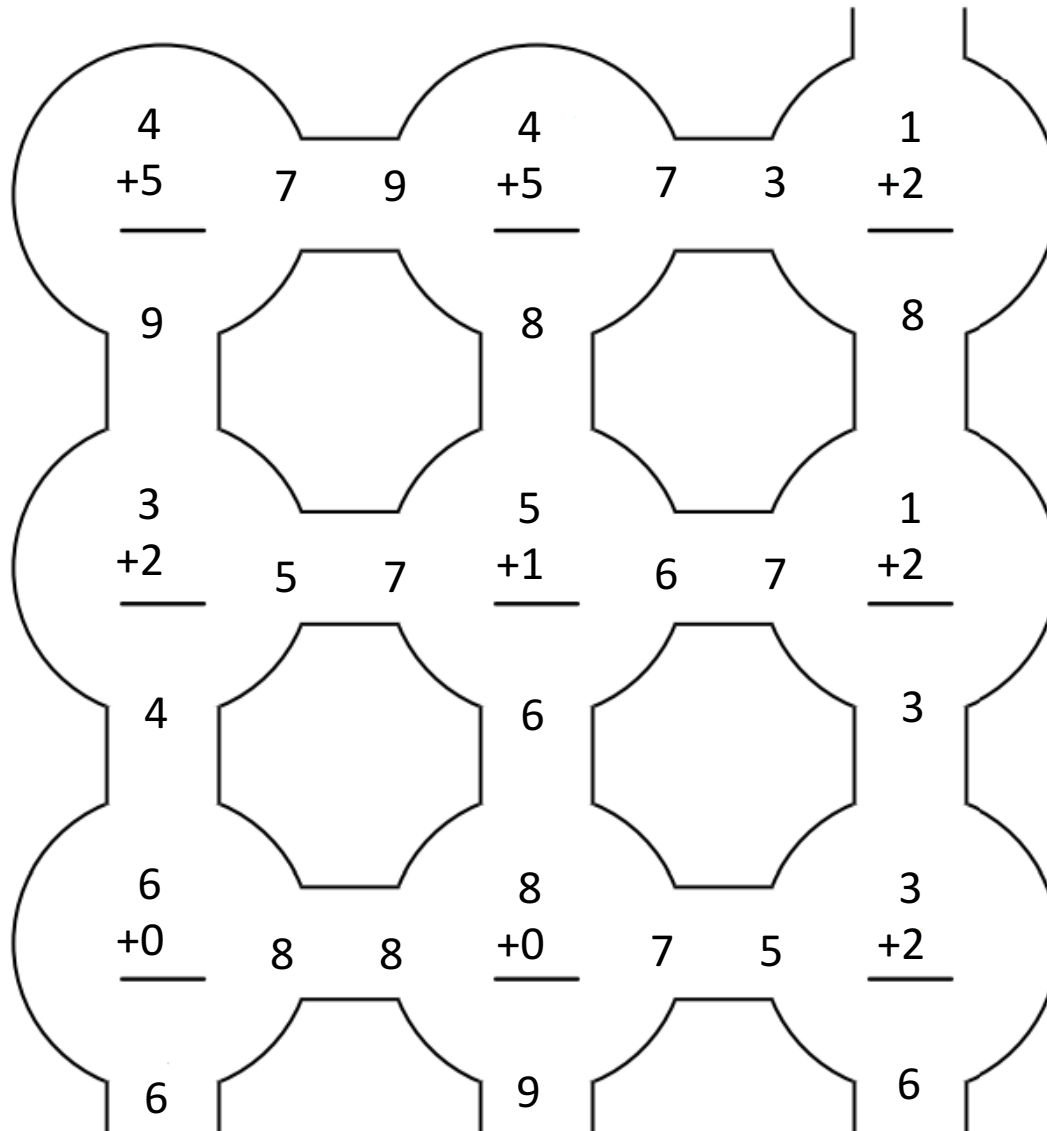
Ayuda al niño a encontrar la salida.

# LABERITOS MATEMÁTICOS DE SUMAS



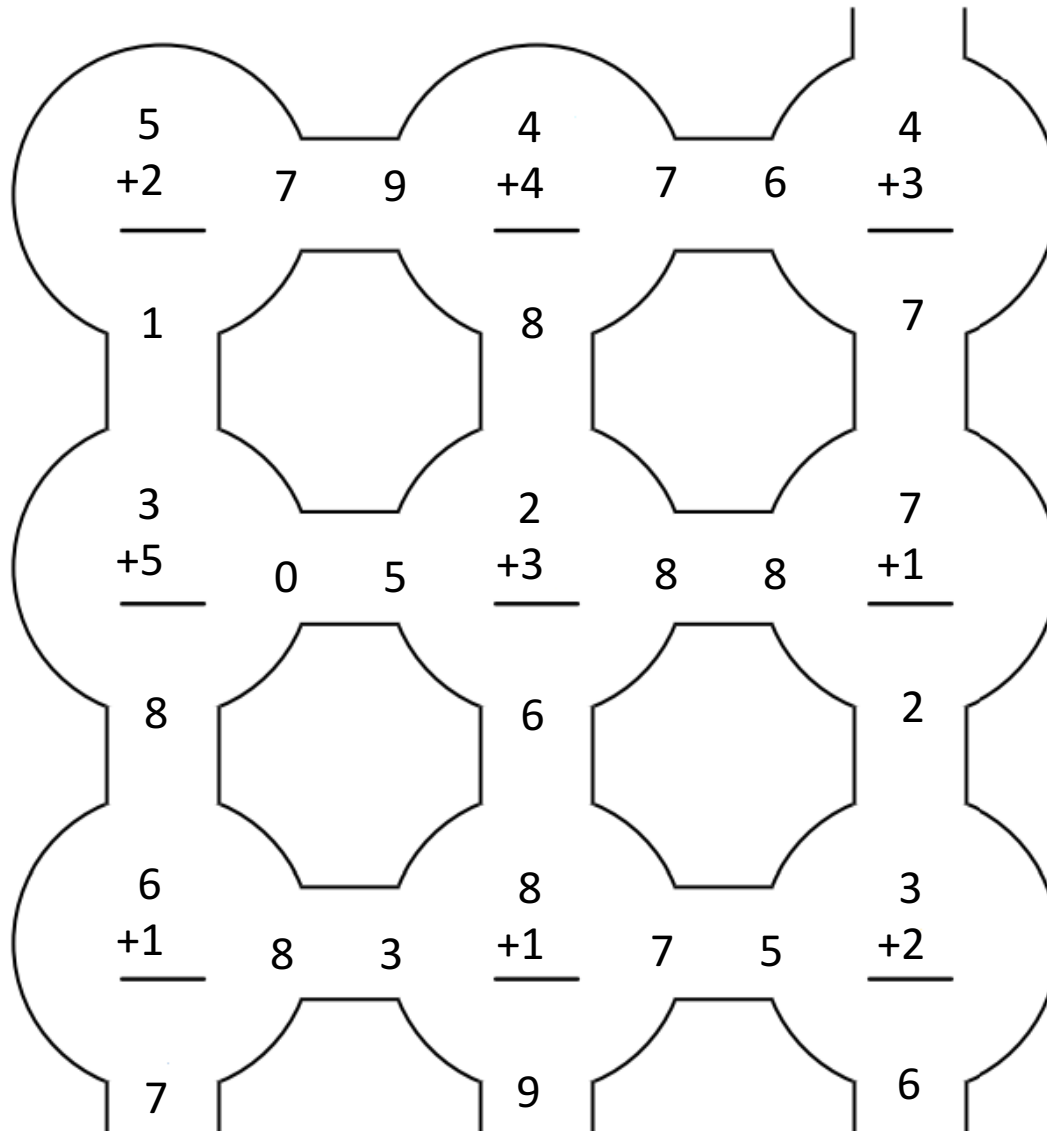
Ayuda al niño a encontrar la salida.

# LABERITOS MATEMÁTICOS DE SUMAS



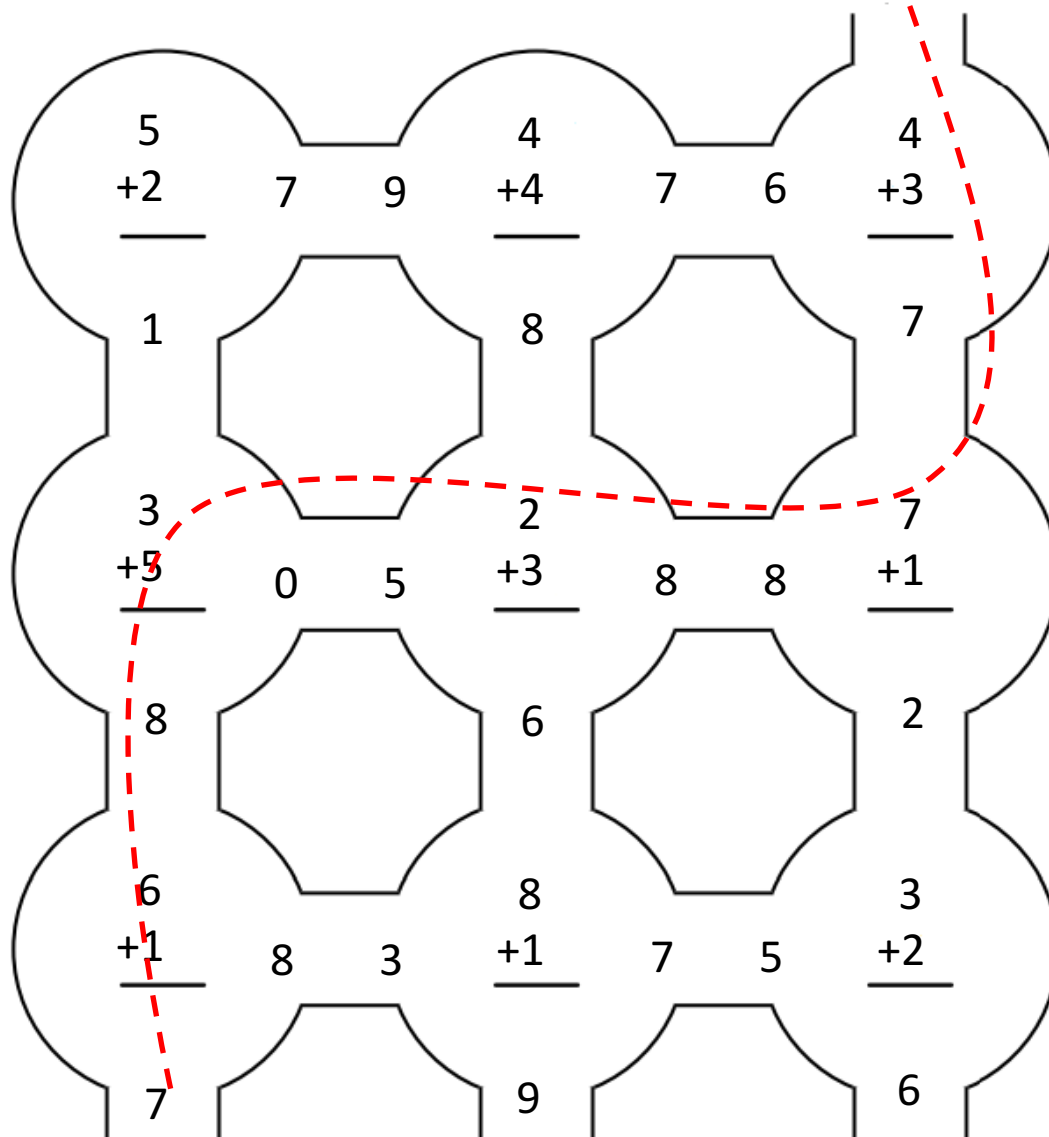
*Ayuda al niño a encontrar la salida.*

# LABERITOS MATEMÁTICOS DE SUMAS



*Ayuda al niño a encontrar la salida.*

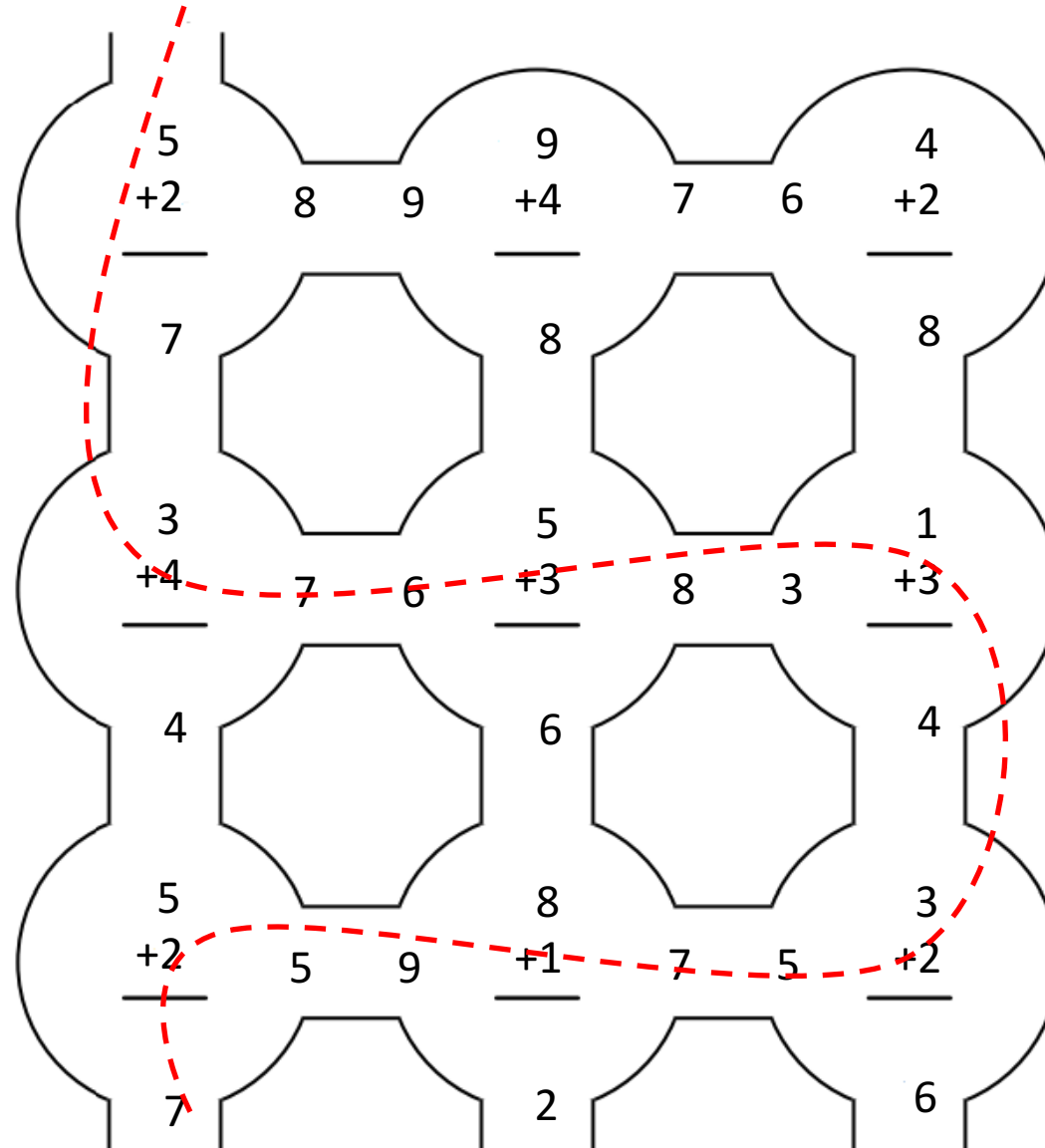
# LABERITOS MATEMÁTICOS DE SUMAS



Ayuda al niño a encontrar la salida.



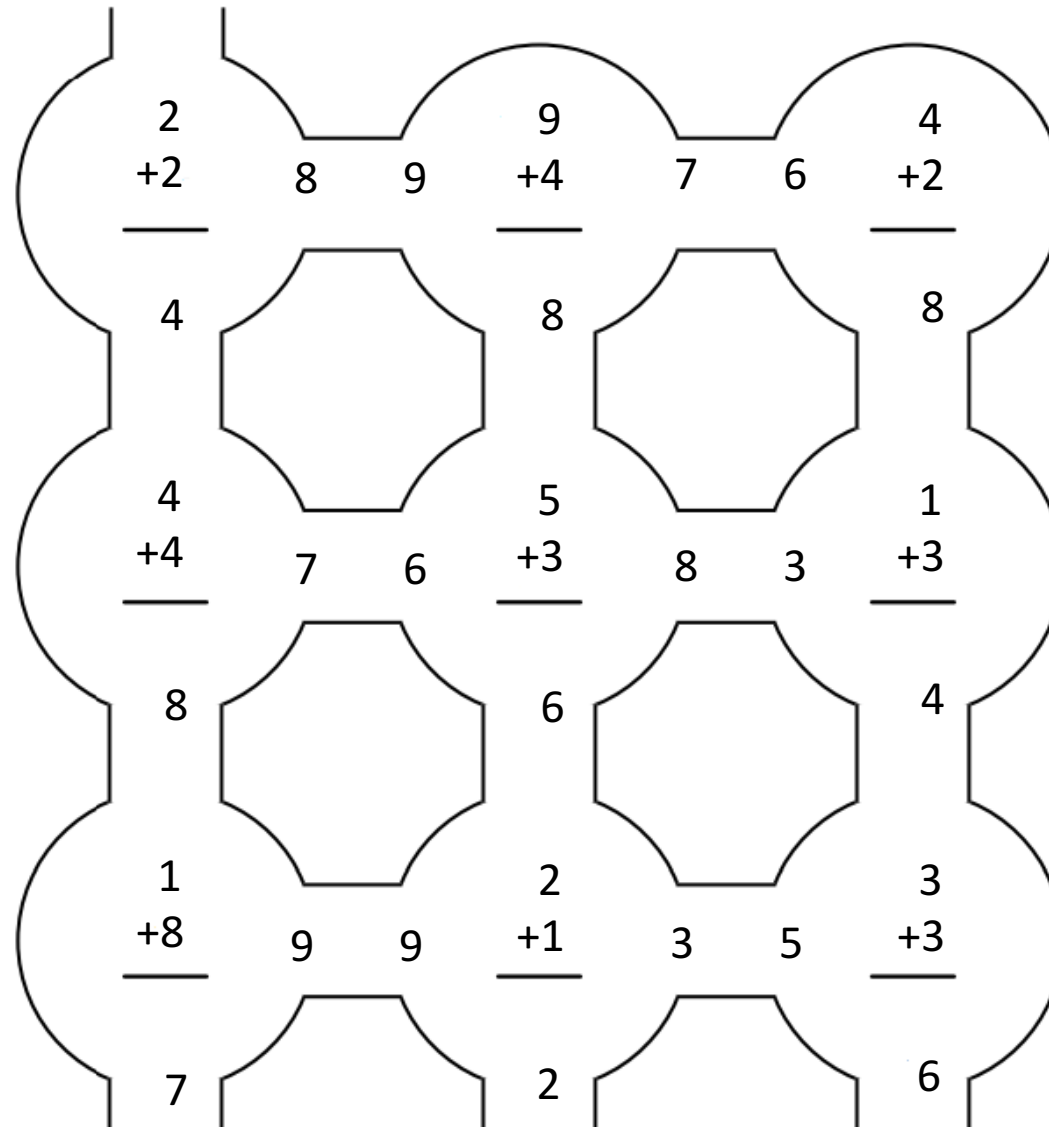
# LABERITOS MATEMÁTICOS DE SUMAS



*Ayuda al niño a encontrar la salida.*



# LABERITOS MATEMÁTICOS DE SUMAS



Ayuda al niño a encontrar la salida.

